

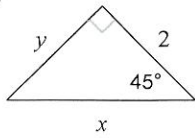
Homework 64 Form A - ODDS ONLY

© 2012 Kuta Software LLC. All rights reserved.

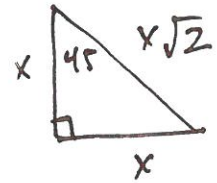
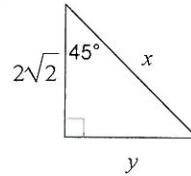
Date _____ Period _____

Find the missing side lengths. Leave your answers as radicals in simplest form.

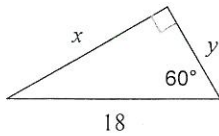
1)



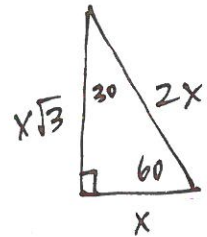
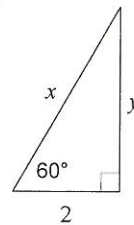
2)



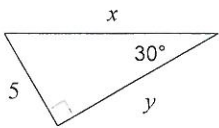
3)



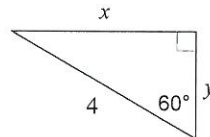
4)



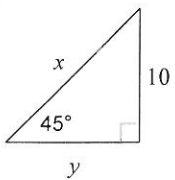
5)



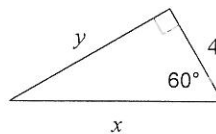
6)



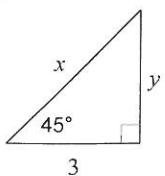
7)



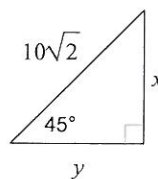
8)



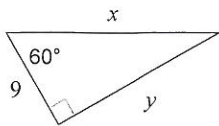
9)



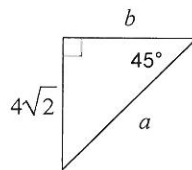
10)



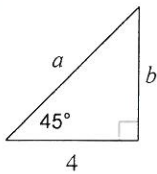
11)



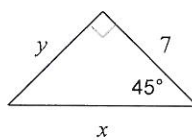
12)



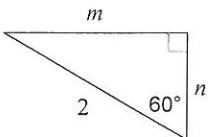
13)



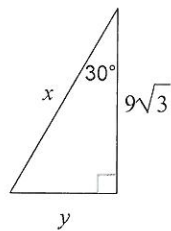
14)



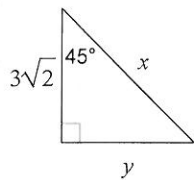
15)



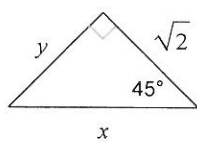
16)



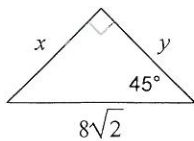
17)



18)



19)



20)

